

Mathematics

Place Value

Match up the correct meaning.

Place value is ...

Face value is ...

Total value is ...

What it looks like 😊




What is worth \$


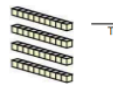

Where it lives 🏠




Write the values of the underlined numbers




	PV	FV	TV
a) 2 <u>3</u> 6	<u>ones</u>	<u>6</u>	<u>6</u>
b) <u>3</u> 07	_____	_____	_____
c) 7 <u>2</u> 9	_____	_____	_____
d) <u>6</u> 14	_____	_____	_____
e) <u>7</u> 00	_____	_____	_____
f) 8 <u>3</u> 0	_____	_____	_____




Find the value of each group of base ten blocks.

 = 100  = 10  = 1

1)  Hundreds  Tens  Ones
Total _____

2)  Hundreds  Tens  Ones
Total _____

3)  Hundreds  Tens  Ones
Total _____

4)  Hundreds  Tens  Ones
Total _____

1)  Hundreds  Tens  Ones
Total _____

What it looks like 😊 is called the _____ value.

What is worth \$ is called the _____ value.

Where it lives 🏠 is called the _____ value.

Maths

Practise your skills using Mathletics. Spend around 20 minutes each night on Mathletics to brush up your basic facts knowledge

Reading Log

Keep up your daily reading log - write down how many pages you read each evening.



Date	Title
Monday	
Tuesday	
Wednesday	
Thursday	

From the Teachers:

- Thank you parents/caregivers who attended our **Cross Country** on Tuesday. The winners and photographs are displayed on our school website
- Only 1 week to go before our Showcase performances in Week 9. The costumes look great.
- **Showcase Tickets** - A letter will be coming home with ticket allocations. Our public performances will be: Tuesday 20 September 6.30 - 7.30pm, Wednesday 21 September 1.45 - 2.45pm and Thursday 22 September 6.30 - 7.30pm.